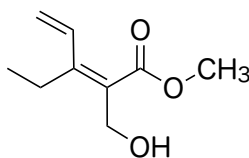
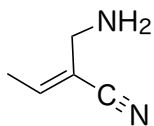
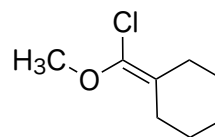
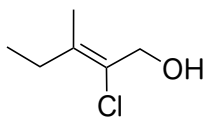
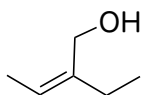


例題3.3 問題3.9, 3.10

次の化合物の二重結合のE, Z配置を決定せよ



問題3.41

次の置換基の組に順位則に従って優先順位をつけよ

1) $-\text{CH}_3$, $-\text{Br}$, $-\text{H}$, $-\text{I}$

2) $-\text{OH}$, $-\text{OCH}_3$, $-\text{H}$, $-\text{I}$

3) $-\text{CH}_3$, $-\text{COOH}$, $-\text{CH}_2\text{OH}$, $-\text{CHO}$

4) $-\text{CH}_3$, $-\text{CH}=\text{CH}$, $-\text{CH}_2\text{CH}_3$, $-\text{CH}(\text{CH}_3)_2$